






Monday

- A football is shaped like a:
  - sphere.  cuboid.
  - cube.
- Circle the even number.  
**15 16 17**
- $6 + 5 \rightarrow 5 + 5 +$
- I have 15c. I need  more to buy the bag of marbles.  **18c**
- $17 - 8 =$
- 2, 4, , 8, 10
- Colour the object that usually measures more than a metre.  

- comes before 61.
- $\frac{1}{2}$  of 18 is .
- A cylinder has  faces.
- A bee has 6 legs. How many legs have three bees? Draw the bees and count the legs.
- My friends and I are making snowmen. We want to make 14. We have made 8 so far. How many more snowmen do we still need to make?


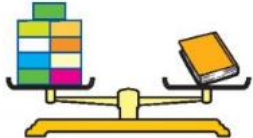
/12

Tuesday

- $\frac{1}{2}$  of 20 is .
  - $15 - 10 =$
  - 8, 10, , 14, 16
  - A tin of peas is shaped like a:
    - sphere.  cone.
    - cylinder.
  - Is a pencil longer or shorter than a metre?
  - Circle the largest number.  
**68 58 45**
  - $9 + 8 =$
  - comes between 64 and 66.
  - Today is .
  - Draw the missing coin to make 15c.  

  - Using the numbers on the target board, write the three pairs of numbers that add up to 11.  
 + ,  + ,  
 +
- |    |   |   |
|----|---|---|
| 1  | 3 | 8 |
| 6  | 9 | 2 |
| 11 | 4 | 7 |
- Using the numbers on the target board, write three numbers that add up to 12.  
 +  +  = 12



/12

Wednesday

- 14, 16, , 20, 22
- I have 5c. I need  more to buy this pencil.  **9c**
- $18 - 8 =$
- The day before yesterday was .
- $\frac{1}{2}$  of 2 is .
- $7 + 7 \rightarrow 10 +$
- Circle the smallest number.  
**67 78 69**
- Write the numeral seventy.
- It takes  blocks to balance the book.  

- $8 + 0 =$
- Nancy had 4c, Georgia had 9c and Matthew had 5c. How much had the three children altogether?
- Max reads a book every day. How many books does he read in a fortnight?

/12

Thursday

- $7 + 8 =$
- The difference between 7 and 9 is .
- The second day of the week is .
- This cup is nearly:  full.  empty. 
- $20 + 10 =$
- Colour the shape that has three sides.  

- $\frac{1}{2}$  of 14 is .
- 65, 66, , 68, 69,
- One more than 19 is .
- The day after tomorrow is .
- Mammy is knitting mittens for her three children. It takes 1 ball of wool to knit 1 mitten. How many balls of wool does Mammy need to knit mittens for her three children?
- If Mammy decided to knit a pair of mittens for herself as well as her three children, how many balls of wool would she need then?

/12

## Week 24 Test

1.  $30 + 10 =$
2. One less than 11 is .
3. A square has  sides.
4. Write the numeral seventy-one.

5. **t u**

$$\begin{array}{r} 64 \\ +18 \\ \hline \end{array}$$

6. Write the smallest 2-digit number that can be made from these dice.



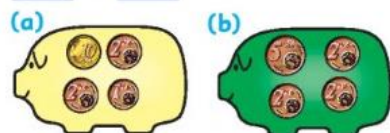
7. Write the missing number in this hundred square section.

15	16	17
25		27
35	36	37

8. Circle the digit that has the same value as twenty: 25.

9. Double 5 is .
10. The first day of the week is .

11. Which piggy bank holds more and by how much?  
 by



12. This glass is nearly:


- full.  
 empty.



### Problems

13. How many toes on five people?

14. Ben is at the bottom of a ladder. He climbs up 3 rungs, slips back 1, climbs up 3 rungs and slips down 1. What rung of the ladder is he on then?   
Draw the ladder.



15. What is the total weight in kg?



**WEEK 24****Monday**

1. sphere
2. 16
3. 1
4. 3c
5. 9
6. 6
7. ship
8. 60
9. 9
10. 3
11. 18
12. 6

**Tuesday**

1. 10
2. 5
3. 12
4. cylinder
5. shorter
6. 68
7. 17
8. 65

9. Tuesday

10. 2c

11.  $2 + 9, 3 + 8, 4 + 7$

12.  $7 + 3 + 2,$

$9 + 2 + 1,$

$7 + 4 + 1,$

$8 + 3 + 1,$

$6 + 4 + 2$

**Wednesday**

1. 18

2. 4c

3. 10

4. Monday

5. 1

6. 4

7. 67

8. 70

9. 9

10. 8

11. 18c

12. 14

**Thursday**

1. 15

2. 2

3. Tuesday

4. full

5. 30

6. triangle

7. 7

8. 67, 70

9. 20

10. Saturday

11. 6

12. 8

**WEEK 24 – TEST**

1. 40

2. 10

3. 4

4. 71

5. 82

6. 36

7. 26

8. 2

9. 10

10. Monday

11. (a) by 4c

12. empty

**Problems**

13. 50

14. 4

15. 7